



FUNCTIONAL SKILLS MATHS & ENGLISH

LEVEL 1 & 2 EXAMS

Functional Skills Maths & English Exams

Exam Centre is a specialist provider of **Functional Skills** qualifications in **Maths** and **English**, offering **City & Guilds** examinations that are fully regulated and **approved by Ofqual**.

Our Functional Skills qualifications are recognised as equivalent to **GCSE grade 4+ (grade C and above)**, providing learners with a credible and nationally accepted route into further education, apprenticeships, and employment.

[BOOK NOW](#)

[LEARN MORE](#)

Online Courses

- ➔ Functional Skills Maths
- ➔ Functional Skills English

Exams

- ➔ Functional Skills **Maths** Level 1 or 2 Exams **in London**
- ➔ Functional Skills **English** Level 1 or 2 Exam **in London**
- ➔ **Online** Functional Skills **Maths** Level 1 or 2 Exams
- ➔ **Online** Functional Skills **English** Level 1 or 2 Exam

***Disclaimer:** The content of this document belongs to the respective awarding body and is shared for educational purposes only, Exam Centre does not claim ownership of this material.*



www.examcentre.co.uk



362 Essex Road
Islington N1 3PD



020 7288 9020

BOOK YOUR FUNCTIONAL SKILLS EXAM NOW!

**Level 2 Functional Skills Mathematics
Sample 4**

**Duration: 25 minutes
Total marks: 15 marks**

SECTION 1 – CALCULATOR NOT PERMITTED

Candidate name (first, last)

First

Last

Candidate enrolment number

Date of birth (DDMMYYYY)

Assessment date (DDMMYYYY)

Centre number

Candidate signature and declaration*

***I declare that I had no prior knowledge of the questions in this assessment and that I will not share information about the questions.**

Please check that your name is correctly printed on the candidate barcode label. If not, please tell the invigilator before the start of the exam.

You should have the following for this assessment:

- a pen with black or blue ink
- a pencil
- an eraser
- a 30cm ruler.

You must NOT use a protractor.

You must NOT use a calculator for Section 1.



General instructions

- Read through each question carefully.
- You may use a dictionary.
- Write all your answers in this booklet.
- Check your calculations and check that your answers make sense.

SECTION 1 – CALCULATOR NOT PERMITTED

There are **15** marks available in this section.

You should check all your work as you go along.

You must **not** use a calculator in this section.



Q1

$$672 \div 21$$

_____ (1 mark)

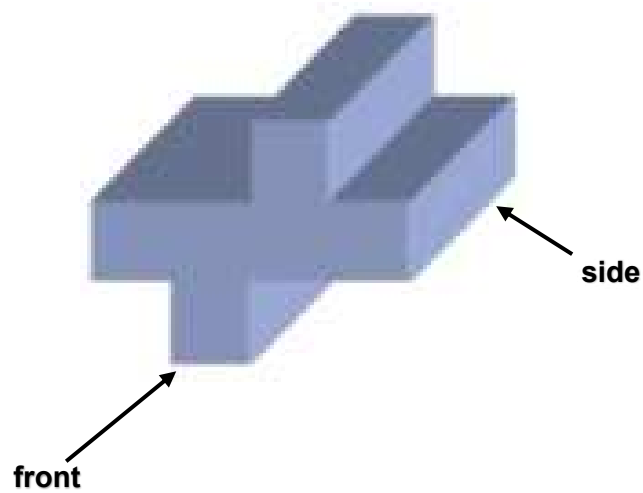
Q2

What is 0.825 as a percentage?

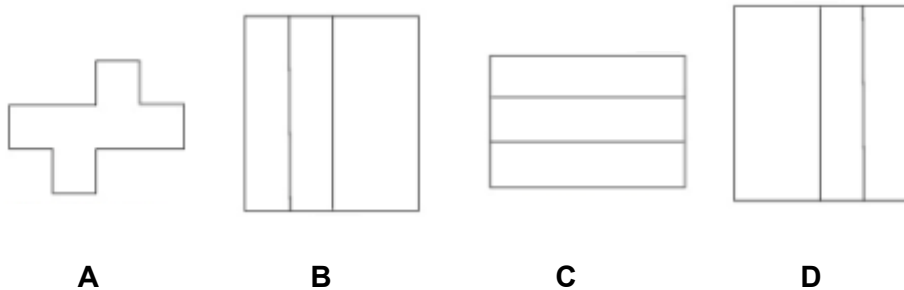
_____ % (1 mark)

Q3

The diagram shows a cross section of a metal bar.



Which one of the following is the **side elevation**?



_____ (1 mark)

Q4

$$\frac{\sqrt{15-6}}{3} =$$

(1 mark)

Q5

A box of chocolates contains 4 hard centres, 6 soft centres and 2 plain chocolates.

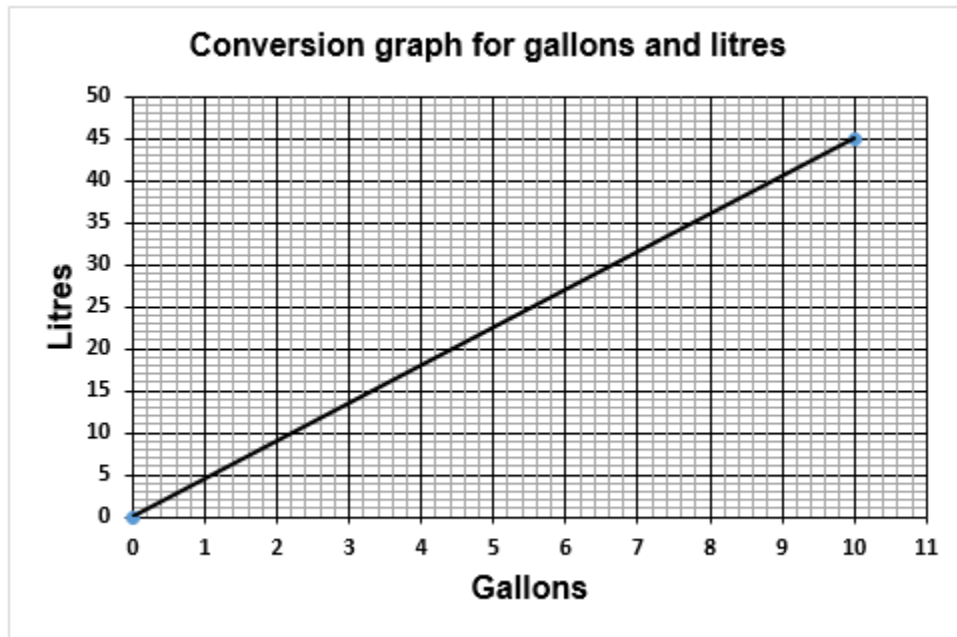
A woman chooses a chocolate at random.

What is the probability that she takes either a hard centre or a soft centre?
Give your answer as a fraction in its lowest terms.

$$\frac{\square}{\square}$$

(1 mark)

Q6



What is 6 gallons in litres, to the nearest litre?

_____ litres

(1 mark)

Q7

What is 42% of 400?

(1 mark)

Q8

An inspector checks the weights of bags of crisps.

Weight of bags of crisps in grams(g)				
24.4	25.5	25.0	25.3	24.4
26.5	25.5	24.9	24.4	25.5
25.5	25.1	25.5	24.2	24.5

What is the modal weight for the bags of crisps?

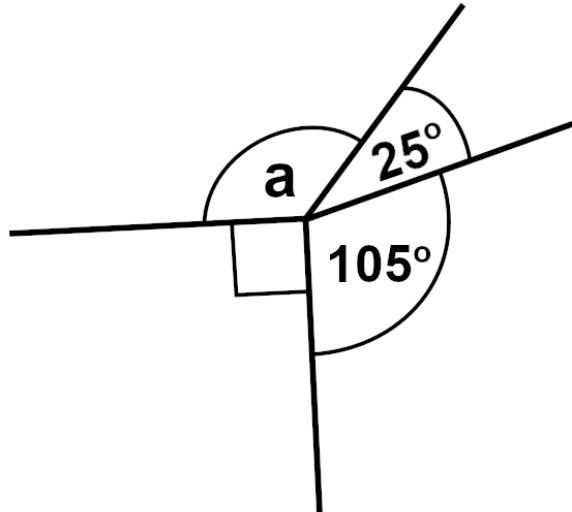
_____ g
(1 mark)

Q9

$$18.369 + 3.197 - 2.475 =$$

(1 mark)

Q10



What is the value of angle **a**?

Angle **a** _____°
(1 mark)

Q11

Eight bricklayers on a building site took 25 hours to build a wall.

The Site Manager needs a similar wall built.

He can hire five bricklayers to build this wall.

He needs to know how much longer it will take to build this wall.

How much **longer** will it take?

Show your working

_____ hours

(2 marks)

Q12

A woman needs to work out how long it will take to drive to York.

She checks the journey on a website.

The distance from her house to York is 80 miles.

20 miles of the journey are through roadworks with a speed restriction of 40mph.

She should drive the rest of the journey at an average speed of 50mph

How long should the journey take?

Show your working

Time taken _____ hours _____ minutes

(3 marks)

End of Section 1



Ready to Take Your Functional Skills Exam?

Exam Centre is offering Ofqual-regulated, City & Guilds approved Functional Skills Maths and English exams; the nationally recognised GCSE grade 4+ (grade C) equivalent. Whether you're sitting for the first time or resitting, we offer flexible exam bookings online and at our centre all year round.

 **Book Now!**

Book Your Exams & Courses

Qualification	Private Course	Online Exam	Exam in London
Functional Skills Maths Level 1 & 2	Enrol on Course	Book Online Exam	Book London Exam
Functional Skills English Level 1 & 2	Enrol on Course	Book Online Exam	Book London Exam

Why Exam Centre?

- Ofqual-regulated & fully accredited
- City & Guilds approved awarding body exams
- Accepted by employers, colleges, universities & apprenticeship providers
- Flexible online and in-person options across the UK
- Recognised GCSE Maths & English equivalent (grade 4+ / grade C)

CALL US FOR MORE INFORMATION:

 **020 7288 9020**

 booking@examcentre.co.uk

 www.examcentre.co.uk